

Name: \_\_\_\_\_

Homework for the week of: January 17-20, 2012		
(Recommended Day)	Literacy, Math, Social Studies, and/or Science	Reading
Monday Parent's initials _____	<b>NO SCHOOL</b>	Read minimum of 20 minutes  Title: Author:
Tuesday Parent's initials _____	- Shapes Crossword pg. 73 - Streetcar Project	Read minimum of 20 minutes  Title: Author:
Wednesday Parent's initials _____	- Number Patterns pg. 56 - Streetcar Project	Read minimum of 20 minutes  Title: Author:
Thursday Parent's initials _____	- Time Word Problems pg. 83 - Streetcar Project	Read minimum of 20 minutes  Title: Author:



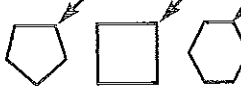




\* Late Opening this Wednesday, January 18<sup>th</sup>.  
 \* If you want to place an order for Scholastic Books, order forms and \$ are due Friday, January 20<sup>th</sup>.

# Shapes Crossword






two-dimensional geometry

Look at the picture clues. Write the singular form of each geometry term in the puzzle.

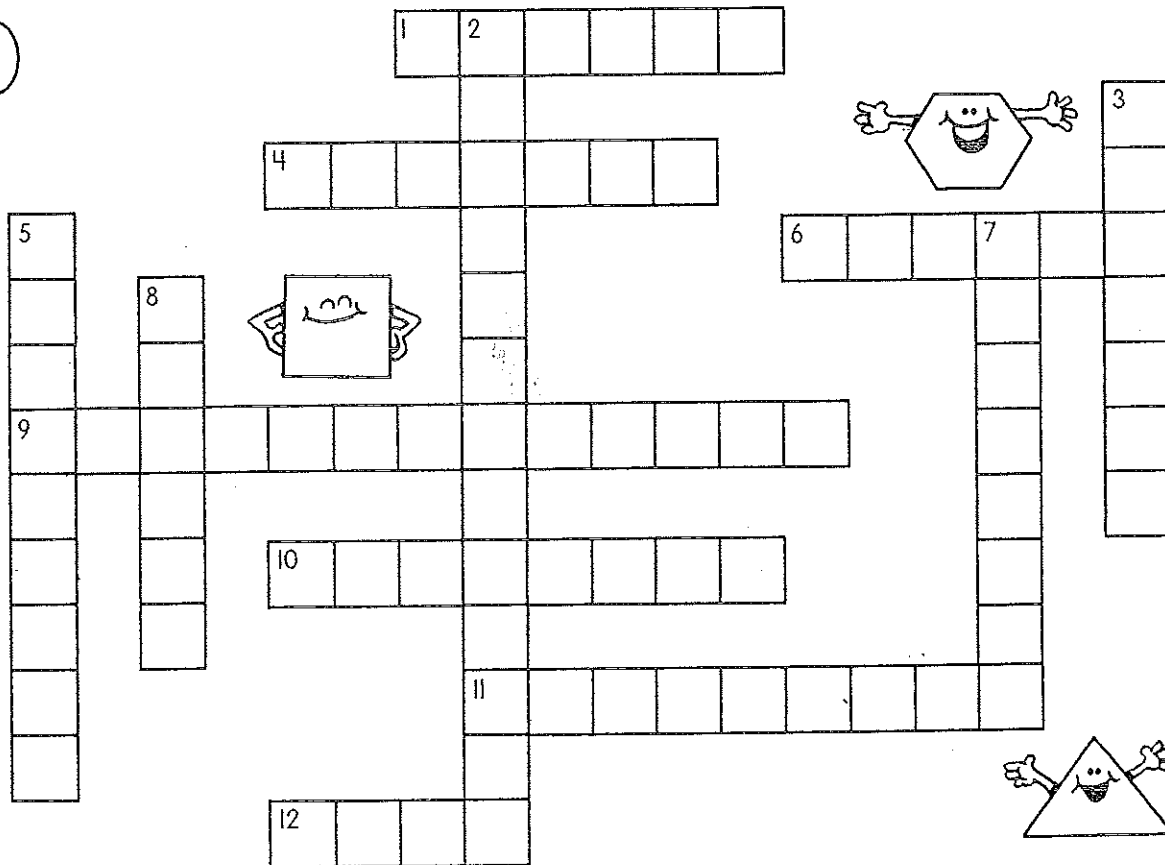
Across:

1. 
4. 
6. 
9. 
10. 
11. 
12. 

Down:

2. 
3. 
5. 
7. 
8. 

- circle
  - hexagon
  - octagon
  - oval
  - parallelogram
  - pentagon
  - quadrilateral
  - rectangle
  - square
  - trapezoid
  - triangle
  - vertex



The crossword puzzle grid consists of 12 numbered starting points for words:

- 1: Down, 6 letters
- 2: Down, 4 letters
- 3: Down, 6 letters
- 4: Across, 6 letters
- 5: Down, 8 letters
- 6: Across, 4 letters
- 7: Across, 4 letters
- 8: Down, 4 letters
- 9: Across, 10 letters
- 10: Across, 6 letters
- 11: Down, 10 letters
- 12: Across, 4 letters



# Number Patterns

► Find the pattern in each row of numbers. Continue the pattern to fill in the blanks. Then match the pattern to the correct rule.




Pattern	Rule
1, 3, 5, __, __, 11, 13	- 11
70, __, 50, __, __, 20, 10	+ 12
1, 8, 15, 22, __, __, __	+ 8
36, 33, 30, __, __, __, __	- 9
115, 100, 85, __, __, __, __	+ 2
64, 55, 46, __, __, __, __	- 10
17, 25, 33, __, __, __, __	- 3
96, __, 84, 78, __, __, __	- 15
88, __, 66, __, 44, __, __	- 6
12, 24, 36, __, __, __, __	+ 7



## Time Word Problems

► Use your knowledge of time to solve the problems.



1. The bell rings for recess to begin at 12:15 and rings again at 1:00 for recess to end. Tamika volunteers to help her teacher water the classroom plants for the first 10 minutes of recess. How many minutes will she have left to play kickball when she is finished?  
\_\_\_\_\_
2. Music class is every Thursday at 1:30. The students stay for 1 hour and 15 minutes. What time do they finish music class?  
\_\_\_\_\_
3. Principal Allen is making up the schedule for next year. The winter holiday will be 2 weeks instead of the usual 10 days. Which is longer, two weeks or ten days? \_\_\_\_\_
4. Room 6 will take a school trip to the museum on April 5. The teacher must call 48 hours before arriving to confirm the time of the tour. On what date must she call? \_\_\_\_\_
5. The trip to the museum takes 1 hour. If the students have traveled for 35 minutes on the bus, how many more minutes will it be until they arrive? \_\_\_\_\_