


11-8-10

My Reading Record


Name _____



Date	Book Title	Parent Signature	Comments?
*			
*			

Read at least 5 times this week. Read two more times for a *BONUS!*

Name _____





lake




lion

Trace and write.



leaf



Children trace and write the letter l and the word leaf.

Letter Description: Top start; slant down, and a monkey tail.


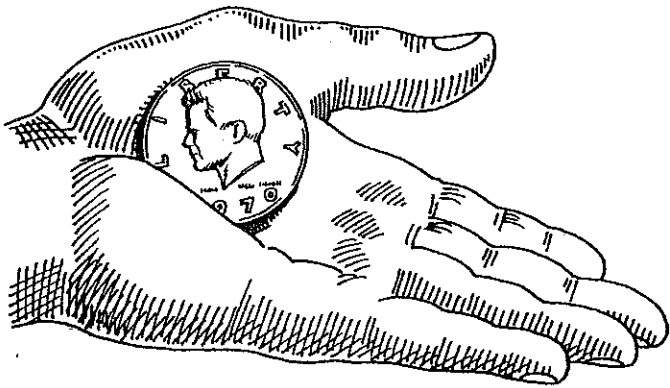
Name _____

Write a math story.



It costs a dollar.

It costs a dollar.



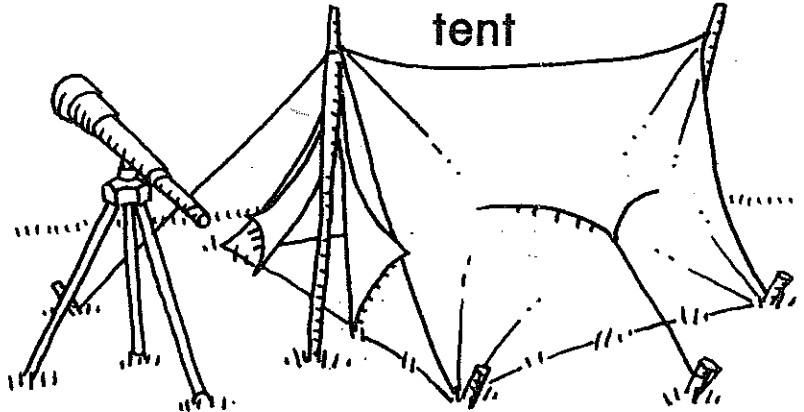
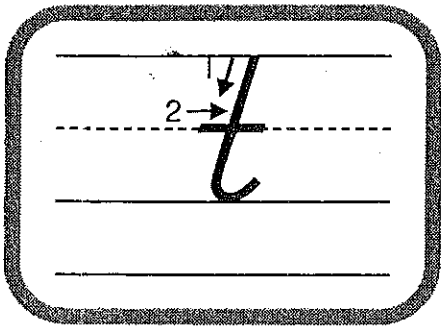
I have a half dollar.

I have a half dollar.

I will need ten nickels.

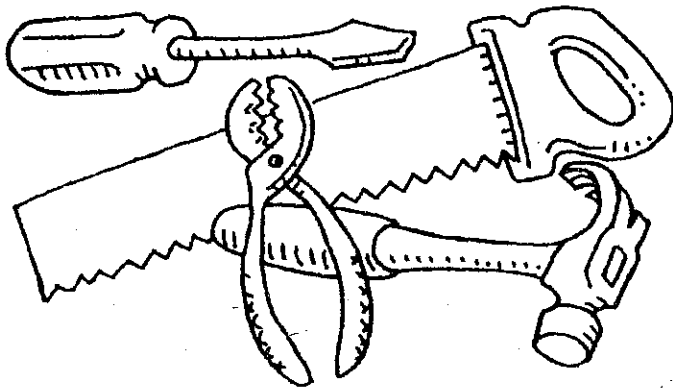

I will need ten nickels.

Name _____




telescope

Trace and write.



tools



Children trace and write the letter t and the word tools.


Letter Description: Top start; slant down, and a monkey tail. Cross.

Name _____

Read and write about Matt.

Matt shuts the gate.

Matt shuts the gate.



He forgot his tan coat.

He forgot his tan coat.

Matt left his tablet too.

Matt left his tablet too.

Name _____

Date _____

Directions: Skip count by 5's. As you go, color each skip counting by 5's number yellow.

1	2	3	4	5	6	7	8	9	10
11	12	13	14	15	16	17	18	19	20
21	22	23	24	25	26	27	28	29	30
31	32	33	34	35	36	37	38	39	40
41	42	43	44	45	46	47	48	49	50
51	52	53	54	55	56	57	58	59	60
61	62	63	64	65	66	67	68	69	70
71	72	73	74	75	76	77	78	79	80
81	82	83	84	85	86	87	88	89	90
91	92	93	94	95	96	97	98	99	100

Look at the yellow boxes you colored in. What kinds of patterns do you notice?

Name _____

Date _____

Ordering Numbers

Write the number that comes before, between, or after.



To order numbers, I count in my mind and think about what comes next.




Before	
9	10
_____	_____
	6
_____	_____
	12
_____	_____
	5
_____	_____
	9
_____	_____
	4
_____	_____
	3
_____	_____
	8
_____	_____

Between		
0	1	2
_____	_____	_____
7		9
_____	_____	_____
4		6
_____	_____	_____
18		20
_____	_____	_____
11		13
_____	_____	_____
15		17
_____	_____	_____
13		15
_____	_____	_____
10		12
_____	_____	_____


After	
6	7
_____	_____
17	
_____	_____
9	
_____	_____
11	
_____	_____
19	
_____	_____
8	
_____	_____
5	
_____	_____
12	
_____	_____

Bears and Berries



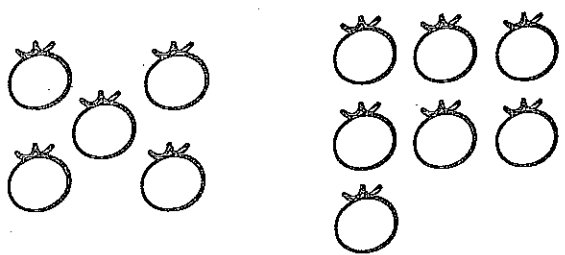
Add.

 Draw  to help you.

 Write.

Solve.

A. Bobby picks 5 berries.
Bella picks 7 berries.
How many berries do they pick in all?



_____ + _____ = _____
berries

B. Bella finds 6 red berries.
Bobby finds 8 blueberries.
How many berries do they find in all?

_____ + _____ = _____
berries

C. Bobby eats 9 berries.
Bella eats 7 berries.
How many berries do they eat in all?

_____ + _____ = _____
berries

D. Bobby and Bella each bring home 8 berries.
How many berries do they bring home in all?

_____ + _____ = _____
berries