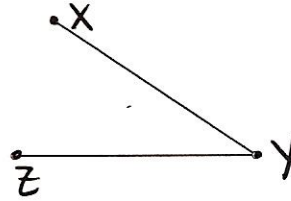


# HW # 16: Congruent Segments, Congruent Angles, Angle Bisectors, Perpendicular Bisectors

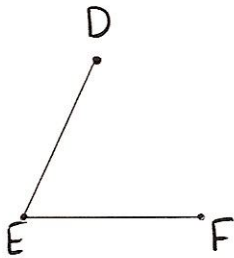
1.) Construct a segment congruent to the given segment.



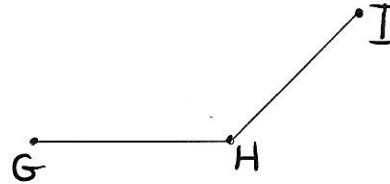
2.) Construct an angle congruent to the given angle.



3.) Construct the bisector of the given angle.



4.) Construct the bisector of the given angle.



5.) Construct the perpendicular bisector of the given segment.



6.) Construct the perpendicular bisector of the given segment.

