


# Area and Polynomials

The area of a rectangle equals its length times its width ( $A = LW$ ).  
 The area of a triangle is half of the area of the same product  $A = \frac{1}{2} LW$

Find the area of each figure.


1

$$2x - 2$$



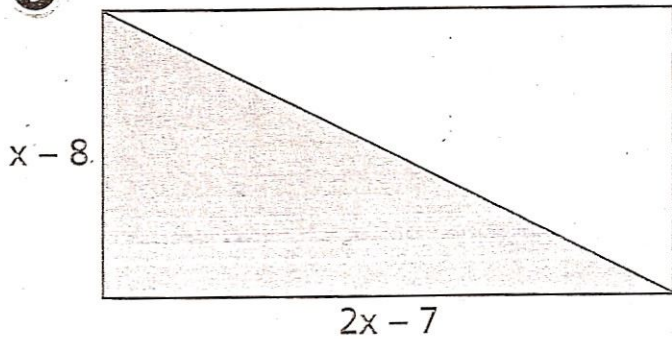
2

$$5x - 4$$



Find the area of each shaded triangle.

3



4

