

SECTION 2-1 REVIEW AND REINFORCE

Earth's Crust in Motion

◆ Understanding Main Ideas

Use the diagrams below to answer items 1–3.

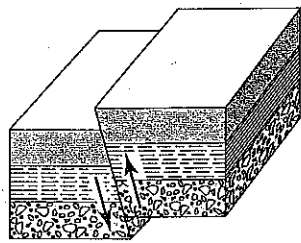


Diagram A

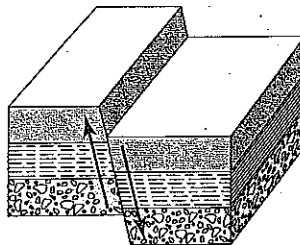


Diagram B

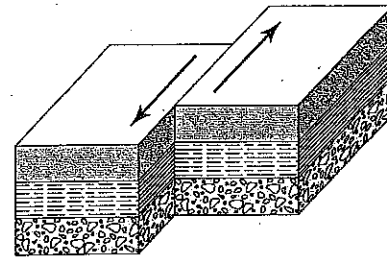


Diagram C

1. Diagram A

a. Type of Fault: _____ b. Stress Force: _____

c. Movement Along Fault: _____

2. Diagram B

a. Type of Fault: _____ b. Stress Force: _____

c. Movement Along Fault: _____

3. Diagram C

a. Type of Fault: _____ b. Stress Force: _____

c. Movement Along Fault: _____

◆ Building Vocabulary

Write a definition for each of these words. Use the back of this sheet if you need more space.

4. deformation _____

5. fault-block mountain _____

6. syncline _____

7. earthquake _____

8. stress _____

9. anticline _____

10. plateau _____

2